




Name: _____


Date: _____

Love Insects


Directions: Count the insects in each group. Read the problem and then combine the groups to find the answer.




$3 + 2 = \underline{\quad}$




$1 + 1 = \underline{\quad}$




$2 + 2 = \underline{\quad}$



$1 + 2 = \underline{\quad}$



$1 + 0 = \underline{\quad}$



$3 + 1 = \underline{\quad}$